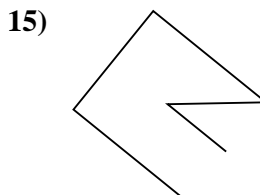
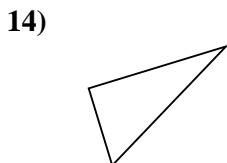
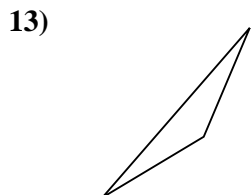
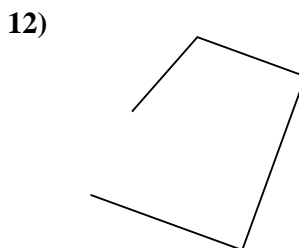
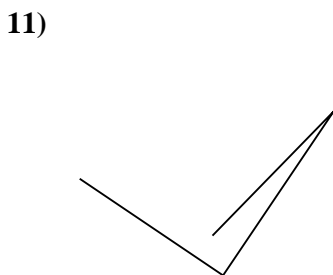
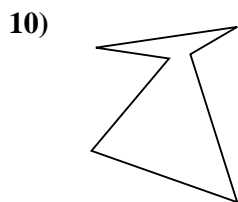
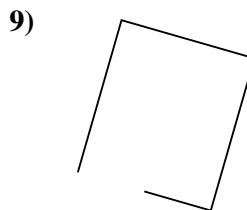
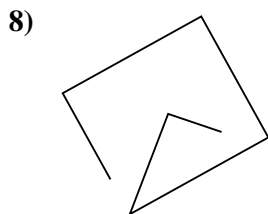
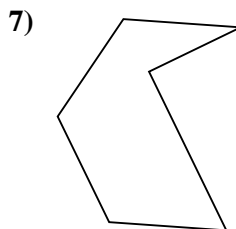
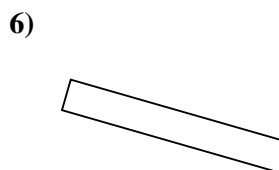
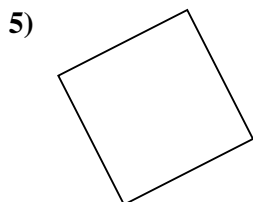
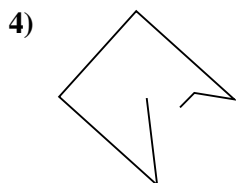
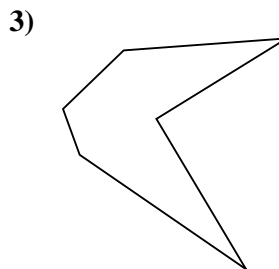
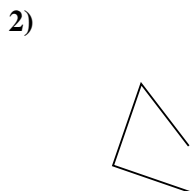
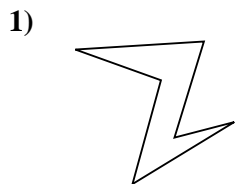




Determine if the figure shown is a 'Triangle', 'Square', 'Rectangle', 'Hexagon' or 'Other'.

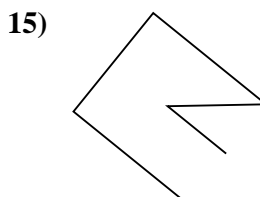
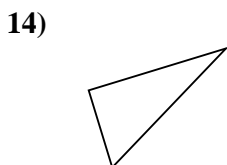
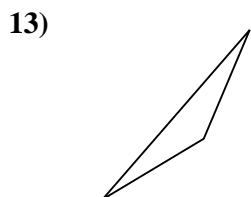
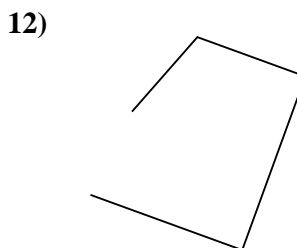
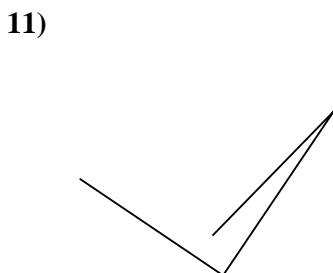
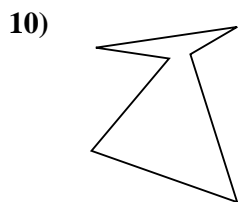
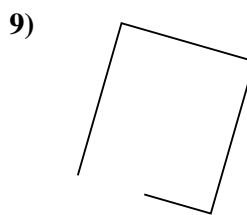
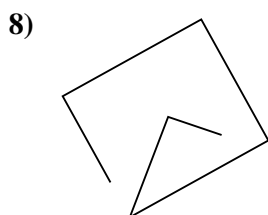
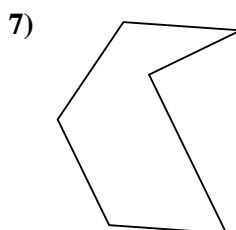
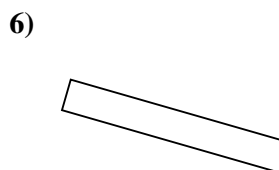
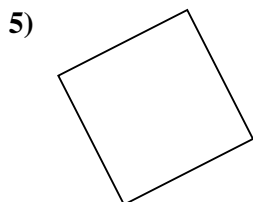
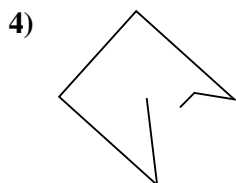
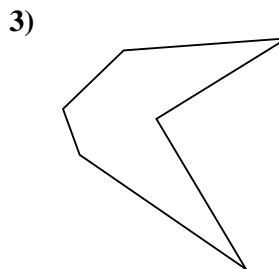
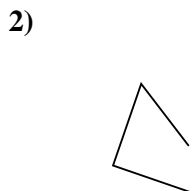
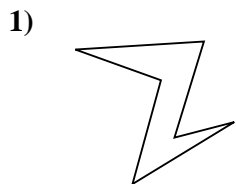
Answers



- 1. _____
- 2. _____
- 3. _____
- 4. _____
- 5. _____
- 6. _____
- 7. _____
- 8. _____
- 9. _____
- 10. _____
- 11. _____
- 12. _____
- 13. _____
- 14. _____
- 15. _____



Determine if the figure shown is a 'Triangle', 'Square', 'Rectangle', 'Hexagon' or 'Other'.



Answers

1. Hexagon

2. Other

3. Hexagon

4. Other

5. Square

6. Rectangle

7. Hexagon

8. Other

9. Other

10. Hexagon

11. Other

12. Other

13. Triangle

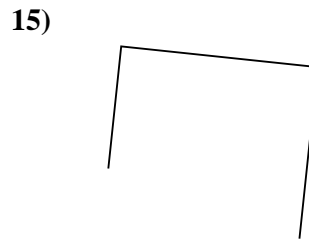
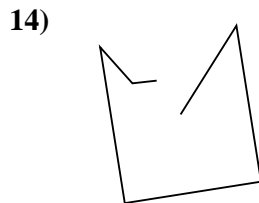
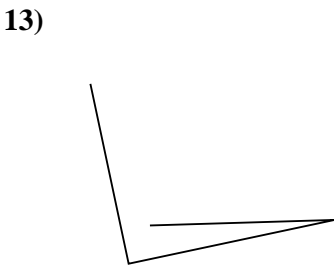
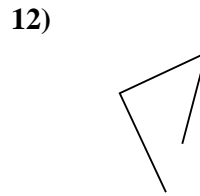
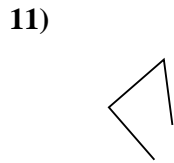
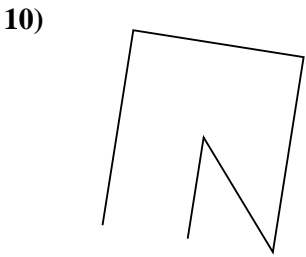
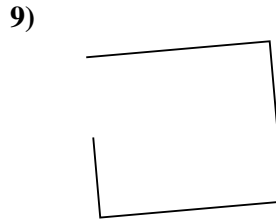
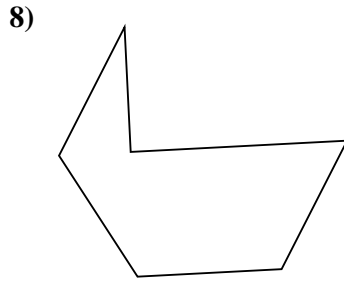
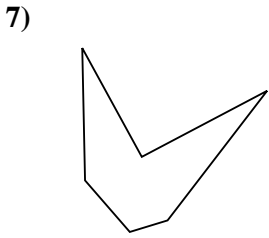
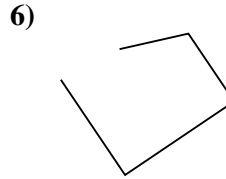
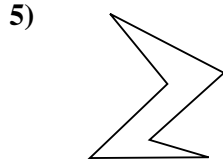
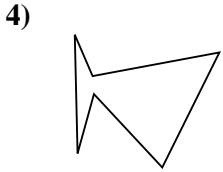
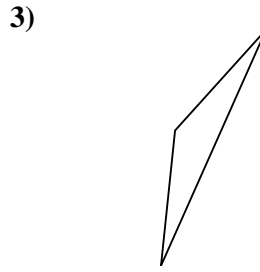
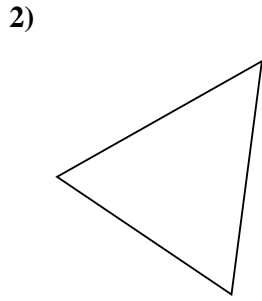
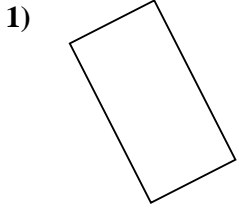
14. Triangle

15. Other



Determine if the figure shown is a 'Triangle', 'Square', 'Rectangle', 'Hexagon' or 'Other'.

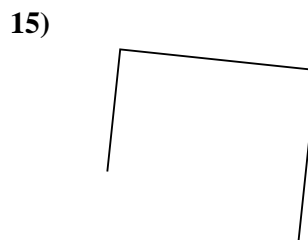
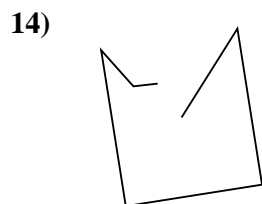
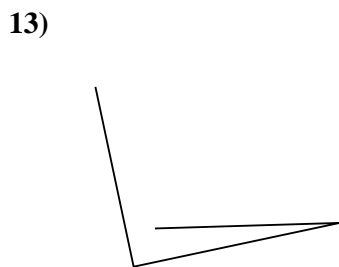
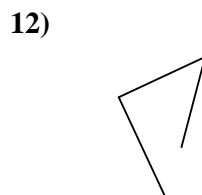
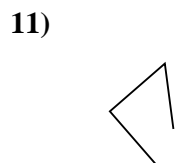
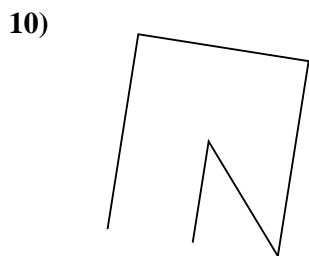
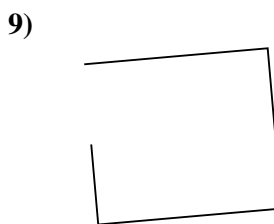
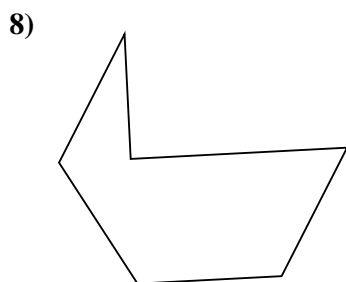
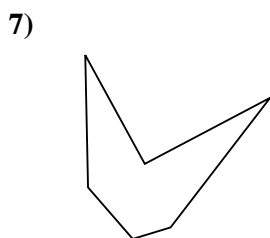
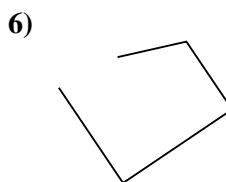
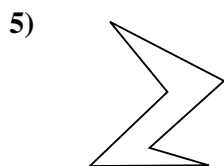
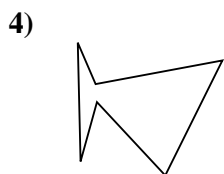
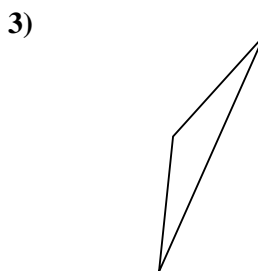
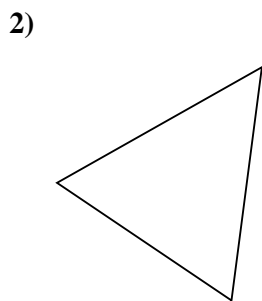
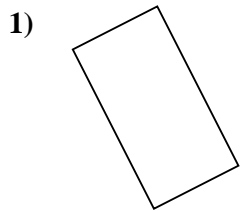
Answers



- 1. _____
- 2. _____
- 3. _____
- 4. _____
- 5. _____
- 6. _____
- 7. _____
- 8. _____
- 9. _____
- 10. _____
- 11. _____
- 12. _____
- 13. _____
- 14. _____
- 15. _____



Determine if the figure shown is a 'Triangle', 'Square', 'Rectangle', 'Hexagon' or 'Other'.



Answers

1. Rectangle

2. Triangle

3. Triangle

4. Hexagon

5. Hexagon

6. Other

7. Hexagon

8. Hexagon

9. Other

10. Other

11. Other

12. Other

13. Other

14. Other

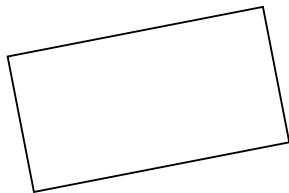
15. Other



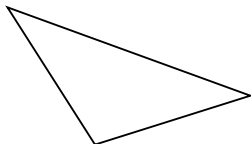
Determine if the figure shown is a 'Triangle', 'Square', 'Rectangle', 'Hexagon' or 'Other'.

Answers

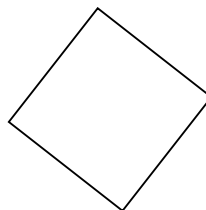
1)



2)



3)

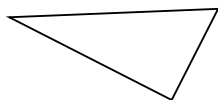


1. _____

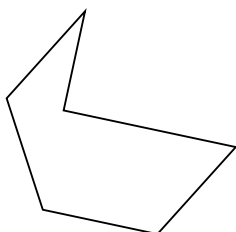
2. _____

3. _____


4)



5)



6)

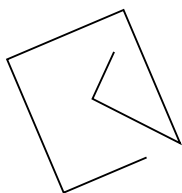


4. _____

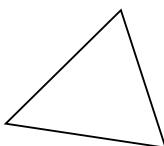
5. _____

6. _____

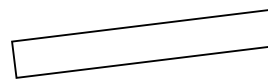
7)



8)



9)



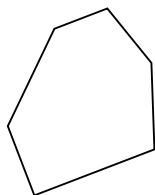
7. _____

8. _____

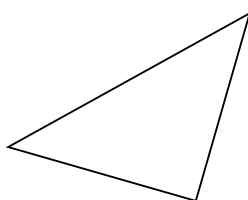
9. _____

10. _____

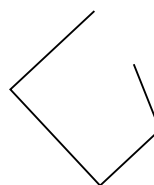
10)



11)



12)



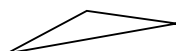
12. _____

13. _____


14. _____

15. _____

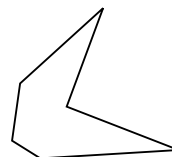
13)



14)



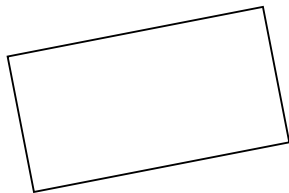
15)



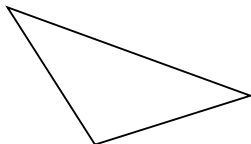


Determine if the figure shown is a 'Triangle', 'Square', 'Rectangle', 'Hexagon' or 'Other'.

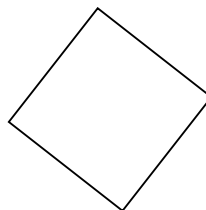
1)



2)



3)



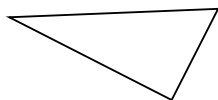
Answers

1. Rectangle

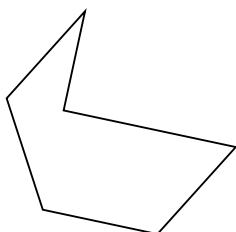
2. Triangle

3. Square


4)



5)



6)

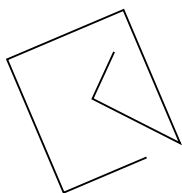


4. Triangle

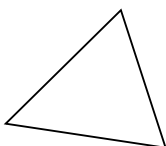
5. Hexagon

6. Hexagon

7)



8)



9)

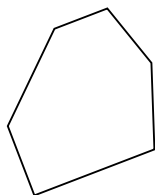


7. Other

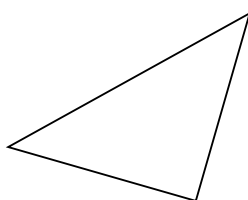
8. Triangle

9. Rectangle

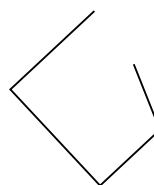
10)



11)



12)



10. Hexagon

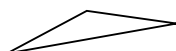
11. Triangle

12. Other


13. Triangle

14. Other

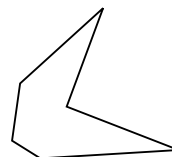
13)



14)



15)



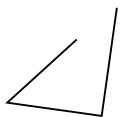
15. Hexagon



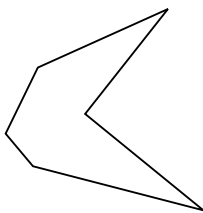
Determine if the figure shown is a 'Triangle', 'Square', 'Rectangle', 'Hexagon' or 'Other'.

Answers

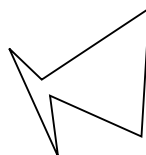
1)



2)



3)

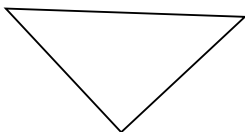


1. _____

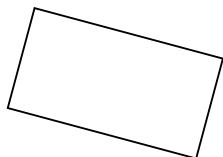
2. _____

3. _____

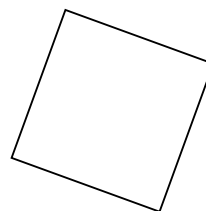
4)



5)



6)




4. _____

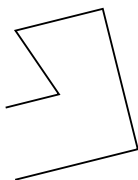
5. _____

6. _____


7)



8)



9)



7. _____

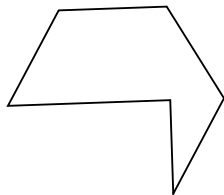
8. _____

9. _____

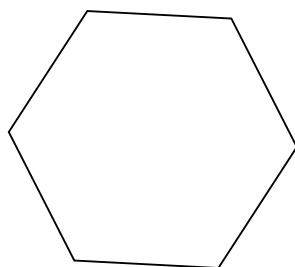
10. _____

11. _____

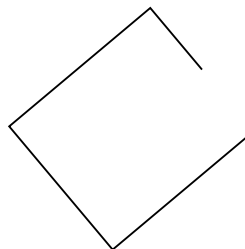
10)



11)



12)



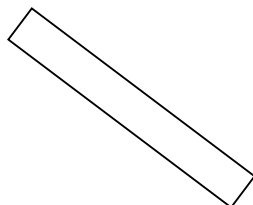
12. _____

13. _____

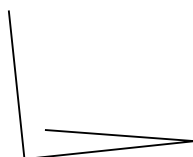
14. _____

15. _____

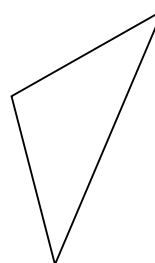
13)



14)



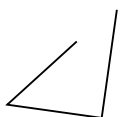
15)



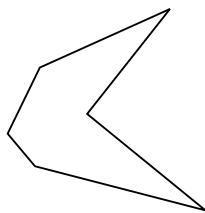


Determine if the figure shown is a 'Triangle', 'Square', 'Rectangle', 'Hexagon' or 'Other'.

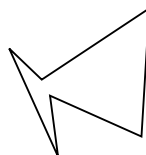
1)



2)



3)



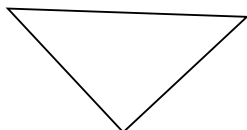
Answers

1. Other

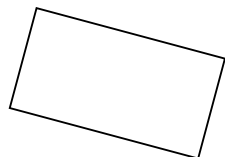
2. Hexagon

3. Hexagon

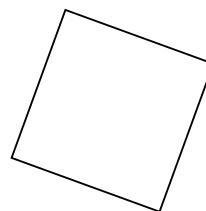
4)



5)



6)




4. Triangle

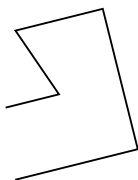
5. Rectangle

6. Square


7)



8)



9)

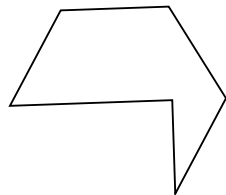


7. Hexagon

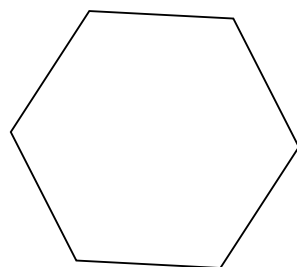
8. Other

9. Other

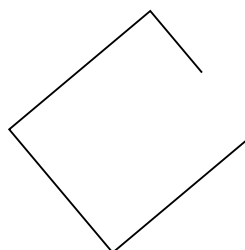
10)



11)



12)



10. Hexagon

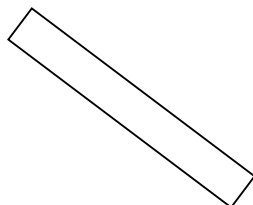
11. Hexagon

12. Other

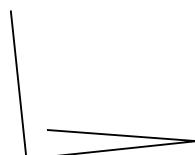
13. Rectangle

14. Other

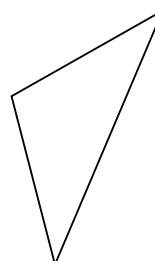
13)



14)



15)

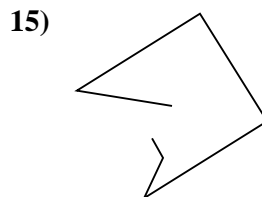
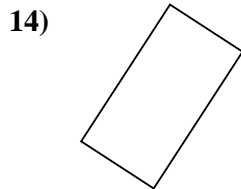
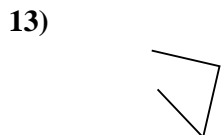
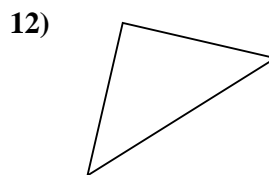
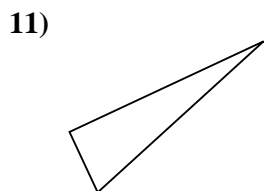
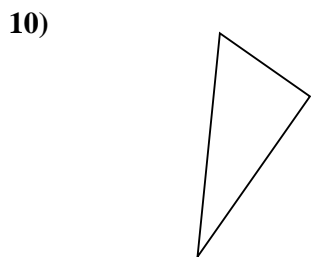

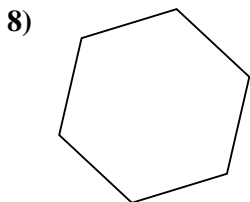
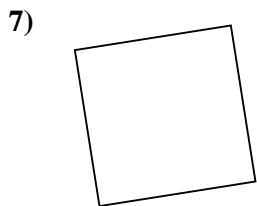
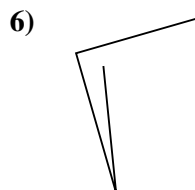
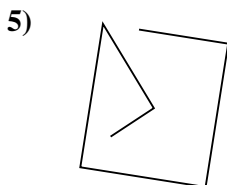
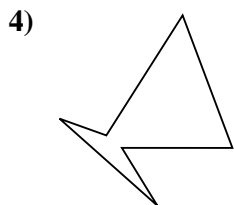
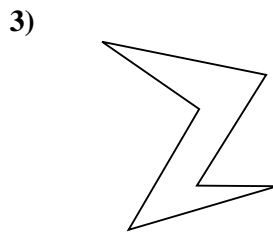
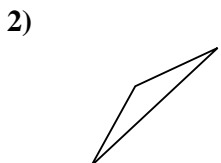
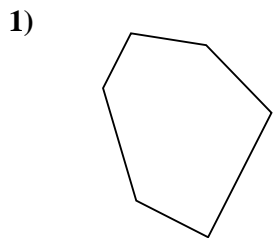


15. Triangle



Determine if the figure shown is a 'Triangle', 'Square', 'Rectangle', 'Hexagon' or 'Other'.

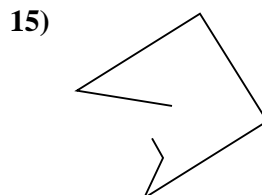
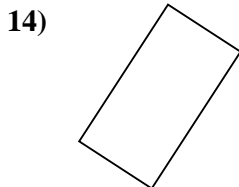
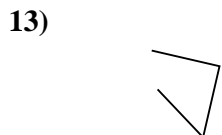
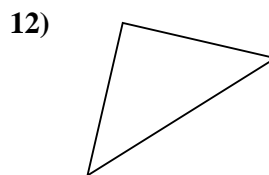
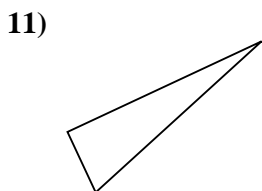
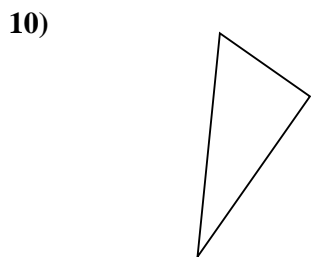
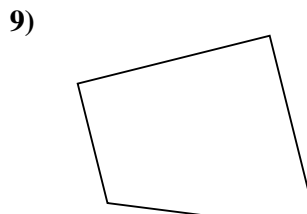
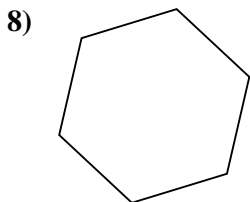
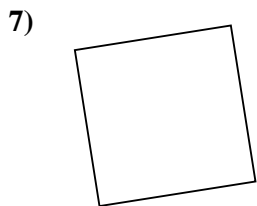
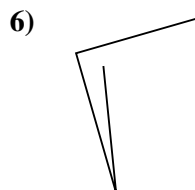
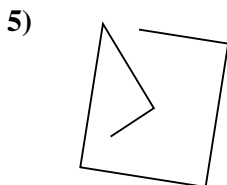
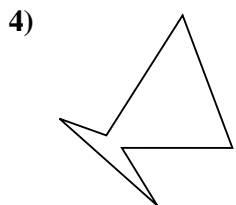
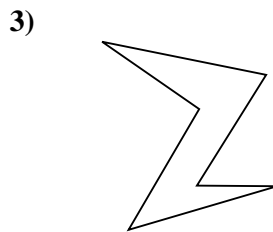
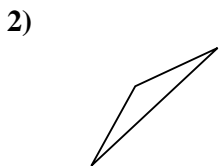
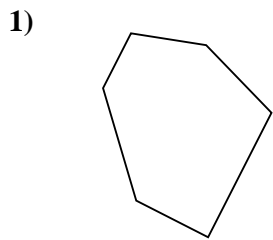
Answers



- 1. _____
- 2. _____
- 3. _____
- 4. _____
- 5. _____
- 6. _____
- 7. _____
- 8. _____
- 9. _____
- 10. _____
- 11. _____
- 12. _____
- 13. _____
- 14. _____
- 15. _____



Determine if the figure shown is a 'Triangle', 'Square', 'Rectangle', 'Hexagon' or 'Other'.



Answers

1. Hexagon

2. Triangle

3. Hexagon

4. Hexagon

5. Other

6. Other

7. Square

8. Hexagon

9. Other

10. Triangle

11. Triangle

12. Triangle

13. Other

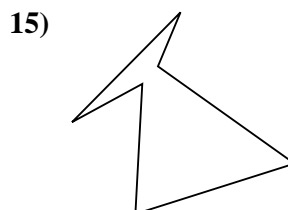
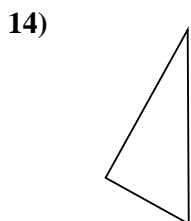
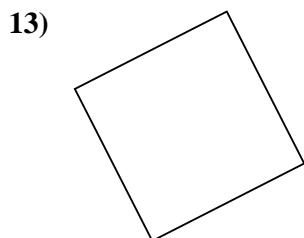
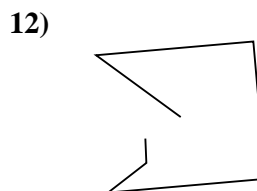
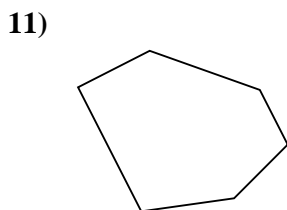

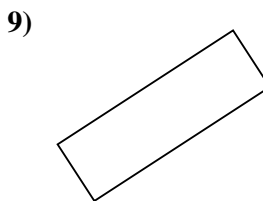
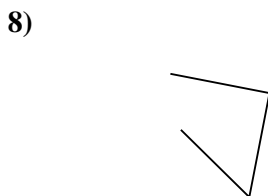
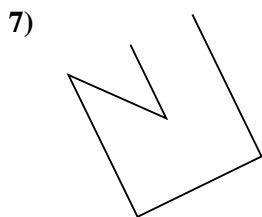
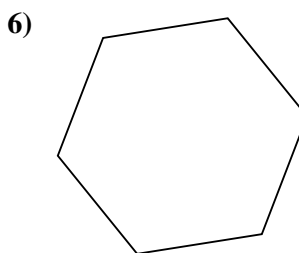
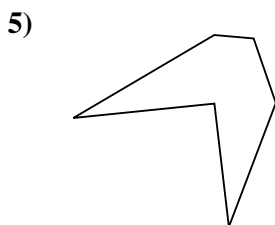
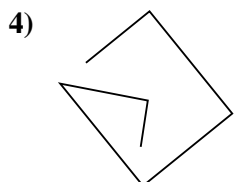
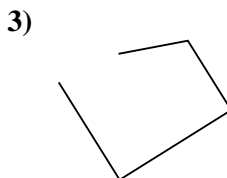
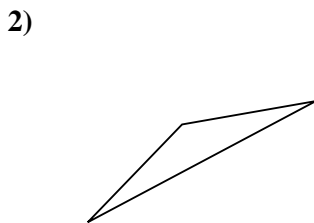
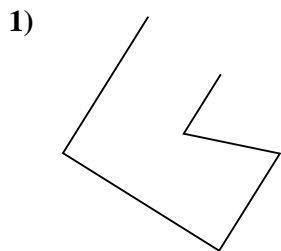
14. Rectangle

15. Other



Determine if the figure shown is a 'Triangle', 'Square', 'Rectangle', 'Hexagon' or 'Other'.


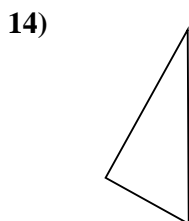
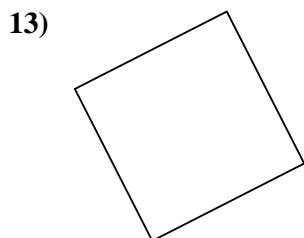
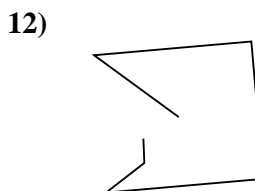
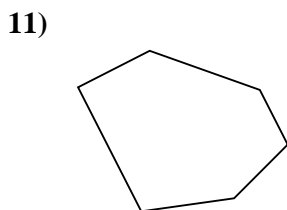

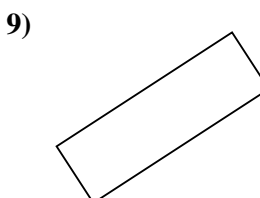
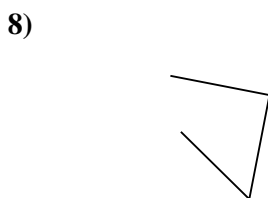
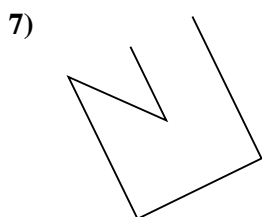
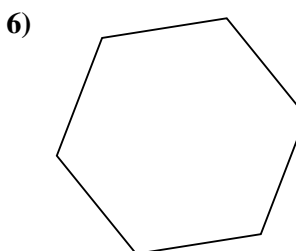
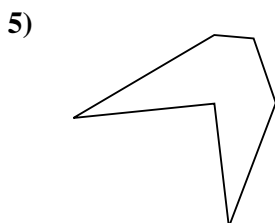
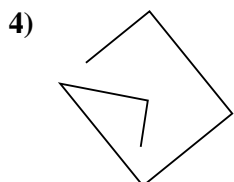
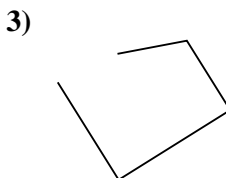
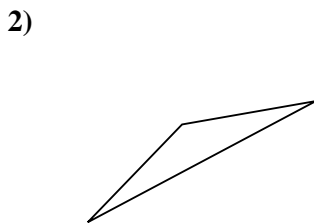
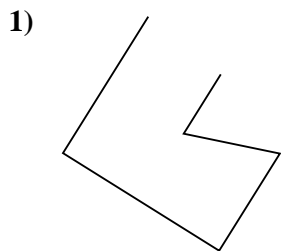
Answers



- 1. _____
- 2. _____
- 3. _____
- 4. _____
- 5. _____
- 6. _____
- 7. _____
- 8. _____
- 9. _____
- 10. _____
- 11. _____
- 12. _____
- 13. _____
- 14. _____
- 15. _____



Determine if the figure shown is a 'Triangle', 'Square', 'Rectangle', 'Hexagon' or 'Other'.



Answers

1. Other

2. Triangle

3. Other

4. Other

5. Hexagon

6. Hexagon

7. Other

8. Other

9. Rectangle

10. Rectangle

11. Hexagon

12. Other

13. Square

14. Triangle

15. Hexagon



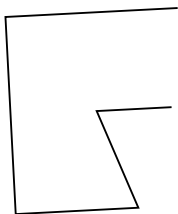
Determine if the figure shown is a 'Triangle', 'Square', 'Rectangle', 'Hexagon' or 'Other'.

Answers

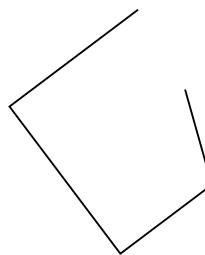
1)



2)



3)

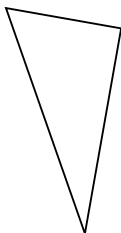


1. _____

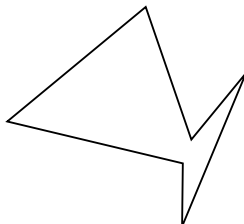
2. _____

3. _____

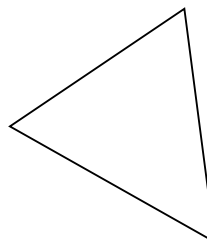
4)



5)



6)

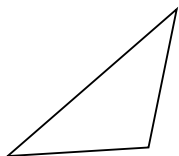


4. _____

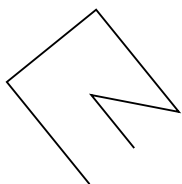
5. _____

6. _____

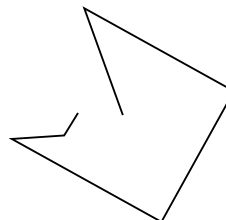
7)



8)



9)



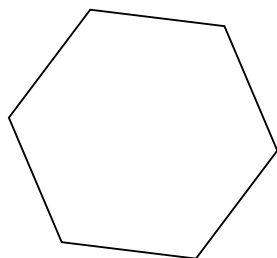
7. _____

8. _____

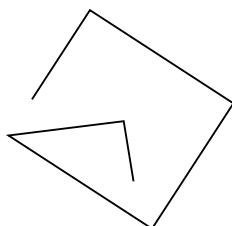
9. _____

10. _____

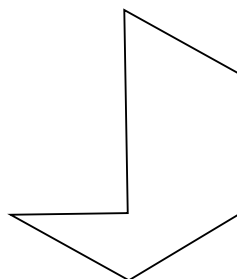
10)



11)



12)



11. _____

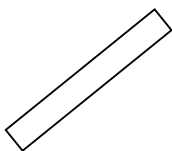
12. _____

13. _____

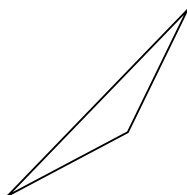
14. _____

15. _____

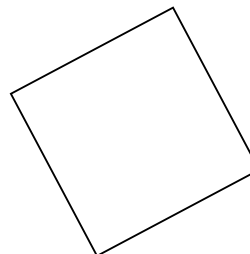
13)



14)



15)



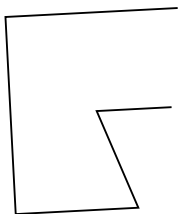


Determine if the figure shown is a 'Triangle', 'Square', 'Rectangle', 'Hexagon' or 'Other'.

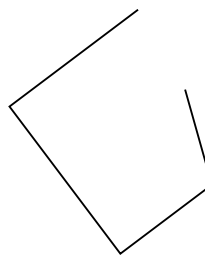
1)



2)



3)



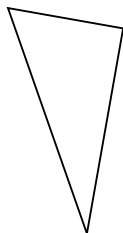
Answers

1. Other

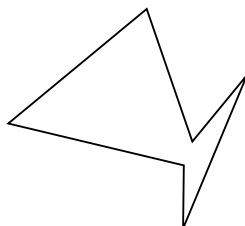
2. Other

3. Other

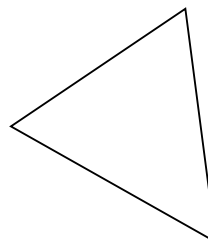
4)



5)



6)

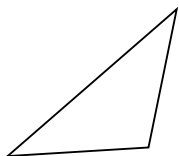


4. Triangle

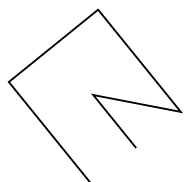
5. Hexagon

6. Triangle

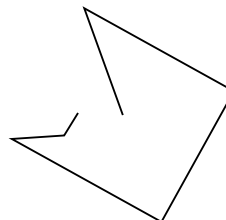
7)



8)



9)

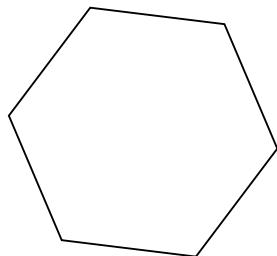


7. Triangle

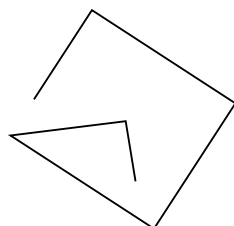
8. Other

9. Other

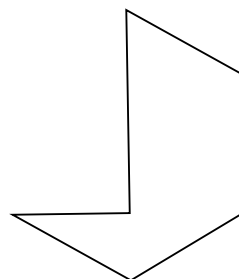
10)



11)



12)



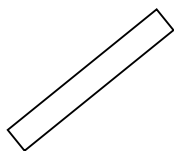
10. Hexagon

11. Other

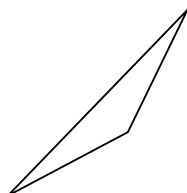
12. Hexagon

13. Rectangle

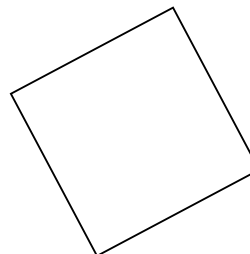
13)



14)



15)



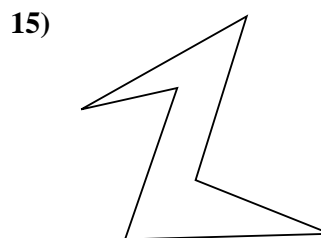
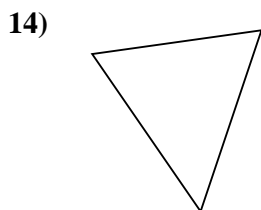
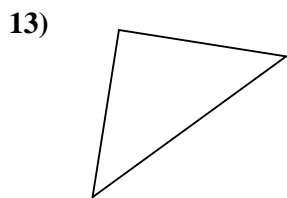
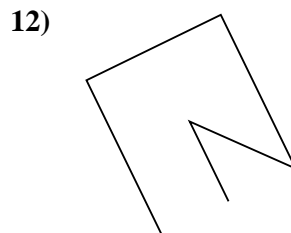
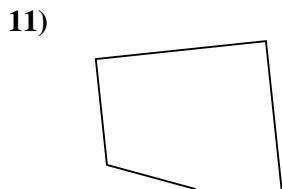
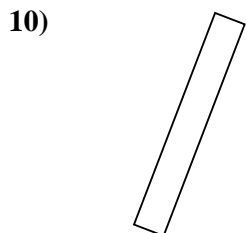
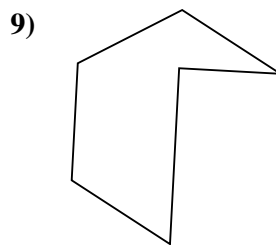
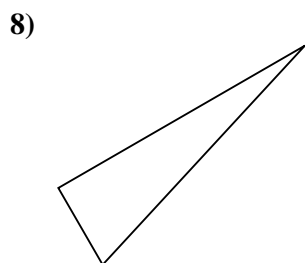
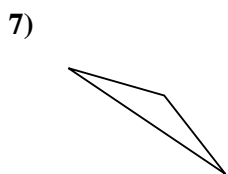
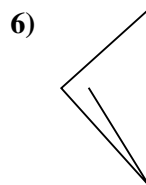
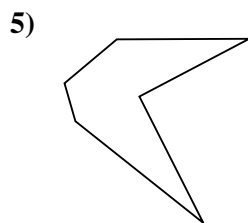
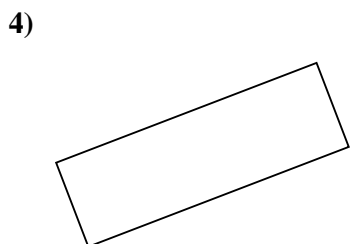
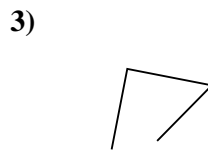
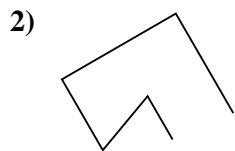
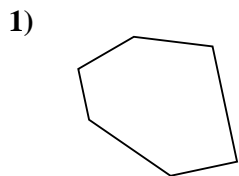
14. Triangle

15. Square



Determine if the figure shown is a 'Triangle', 'Square', 'Rectangle', 'Hexagon' or 'Other'.

Answers



1. _____

2. _____

3. _____

4. _____

5. _____

6. _____

7. _____

8. _____

9. _____

10. _____

11. _____

12. _____

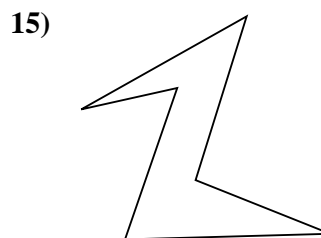
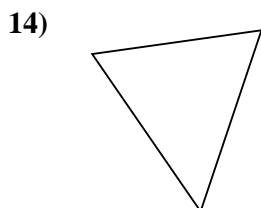
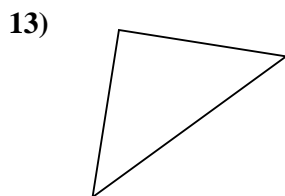
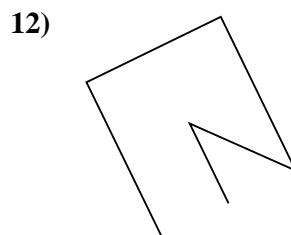
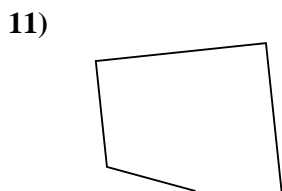
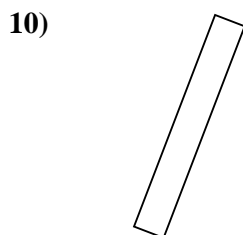
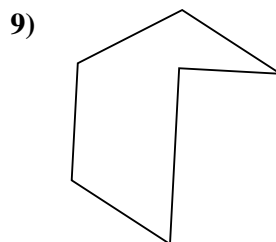
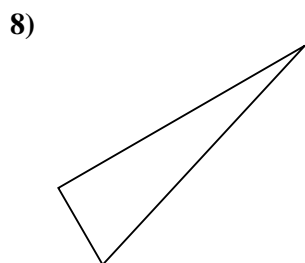
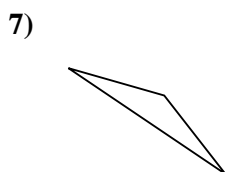
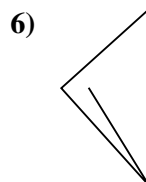
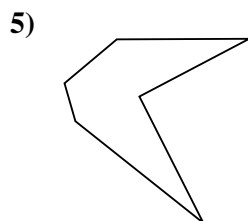
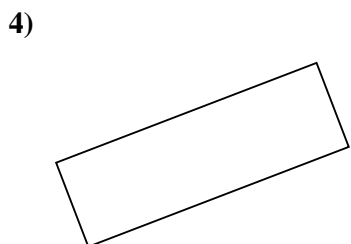
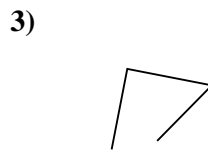
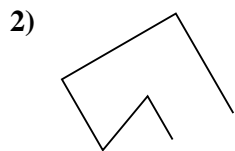
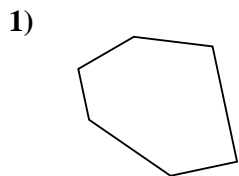
13. _____

14. _____

15. _____



Determine if the figure shown is a 'Triangle', 'Square', 'Rectangle', 'Hexagon' or 'Other'.



Answers

1. Hexagon

2. Other

3. Other

4. Rectangle

5. Hexagon

6. Other

7. Triangle

8. Triangle

9. Hexagon

10. Rectangle

11. Other

12. Other

13. Triangle

14. Triangle

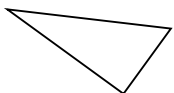
15. Hexagon



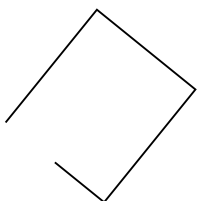
Determine if the figure shown is a 'Triangle', 'Square', 'Rectangle', 'Hexagon' or 'Other'.

Answers


1)



2)



3)

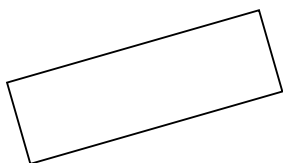


1. _____

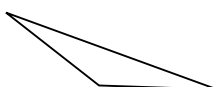
2. _____

3. _____

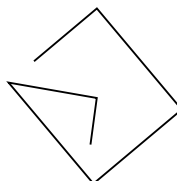
4)



5)



6)




4. _____

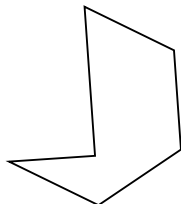
5. _____

6. _____

7)



8)



9)



7. _____

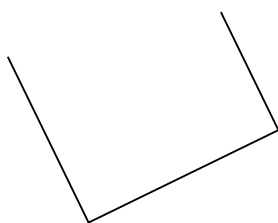
8. _____

9. _____

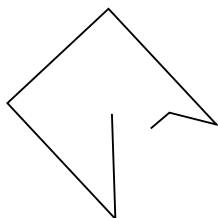
10. _____

11. _____

10)



11)



12)



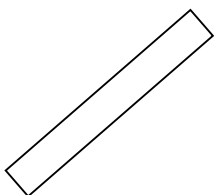
12. _____

13. _____

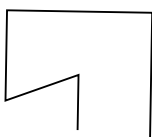
14. _____

15. _____

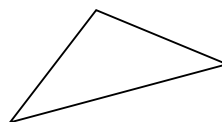
13)



14)



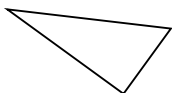
15)



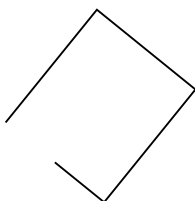


Determine if the figure shown is a 'Triangle', 'Square', 'Rectangle', 'Hexagon' or 'Other'.


1)



2)



3)



Answers

1. Triangle

2. Other

3. Square

4. Rectangle

5. Triangle

6. Other

7. Triangle

8. Hexagon

9. Other

10. Other

11. Other

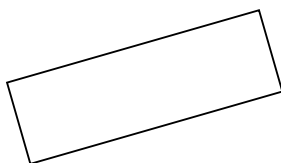
12. Triangle

13. Rectangle

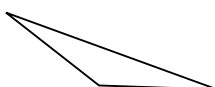
14. Other

15. Triangle

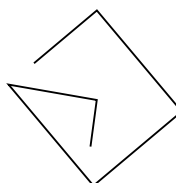
4)



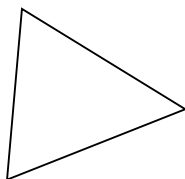
5)



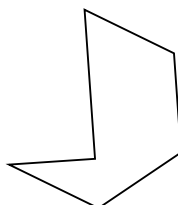
6)



7)



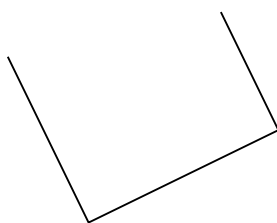
8)



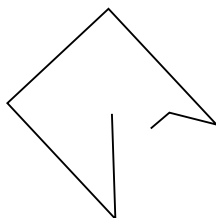
9)



10)



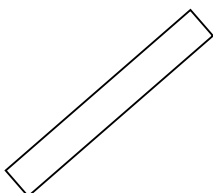
11)



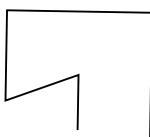
12)



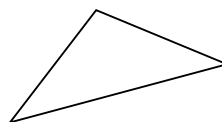
13)



14)



15)





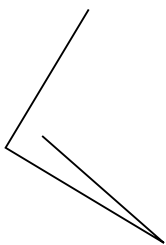
Determine if the figure shown is a 'Triangle', 'Square', 'Rectangle', 'Hexagon' or 'Other'.

Answers

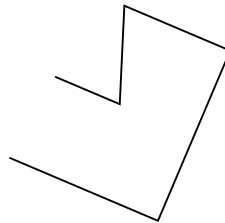
1)



2)



3)

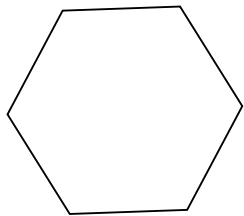


1. _____

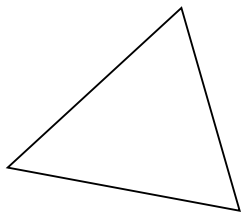
2. _____

3. _____

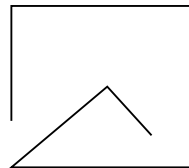
4)



5)



6)

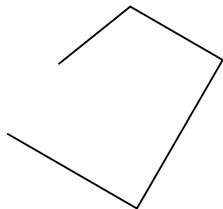


4. _____

5. _____

6. _____

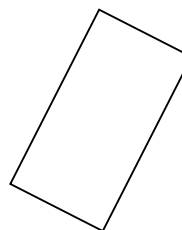
7)



8)



9)



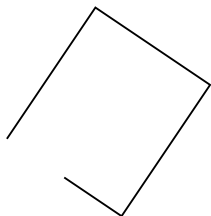
7. _____

8. _____


9. _____

10. _____

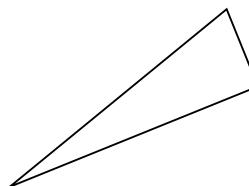
10)



11)



12)



11. _____

12. _____

13. _____

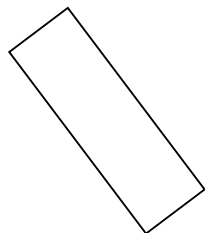
14. _____

15. _____


13)



14)



15)



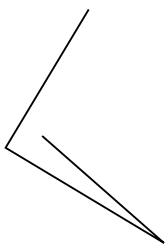


Determine if the figure shown is a 'Triangle', 'Square', 'Rectangle', 'Hexagon' or 'Other'.

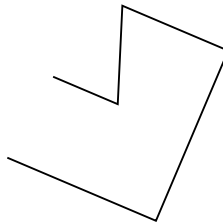
1)



2)



3)



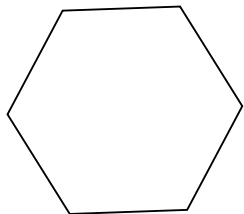
Answers

1. Other

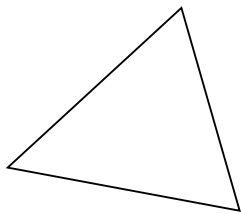
2. Other

3. Other

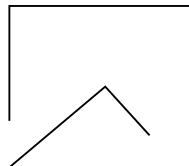
4)



5)



6)

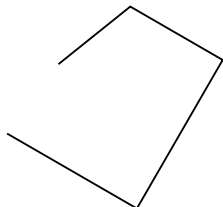


4. Hexagon

5. Triangle

6. Other

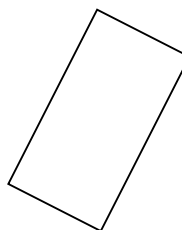
7)



8)



9)

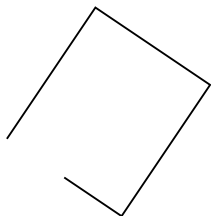


7. Other


8. Triangle

9. Rectangle

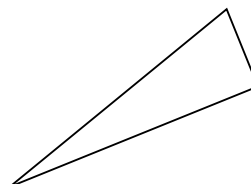
10)



11)



12)



10. Other

11. Triangle

12. Triangle

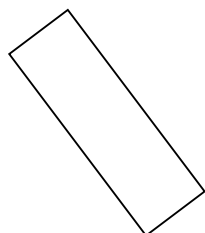
13. Rectangle

14. Rectangle


13)



14)



15)



15. Other

